

Surname
Other Names

Centre Number

Candidate Number
0



**GCSE**

185/10

**MATHEMATICS  
HIGHER TIER  
PAPER 2**

A.M. THURSDAY, 17 November 2011

2 hours

**ADDITIONAL MATERIALS**

A calculator will be required for this paper.

**INSTRUCTIONS TO CANDIDATES**

Use black ink or black ball-point pen.

Write your name, centre number and candidate number in the spaces at the top of this page.

Answer **all** the questions in the spaces provided.

Take  $\pi$  as 3.14 or use the  $\pi$  button on your calculator.

**INFORMATION FOR CANDIDATES**

You should give details of your method of solution especially when a calculator is used.

Unless stated, diagrams are not drawn to scale.

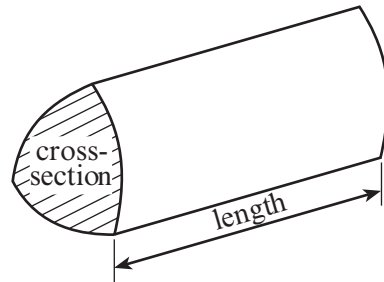
Scale drawing solutions will not be acceptable where you are asked to calculate.

The number of marks is given in brackets at the end of each question or part-question.

For Examiner's use only		
Question	Maximum Mark	Mark Awarded
1	5	
2	9	
3	9	
4	6	
5	6	
6	8	
7	6	
8	8	
9	4	
10	11	
11	3	
12	5	
13	7	
14	6	
15	7	
<b>TOTAL MARK</b>		

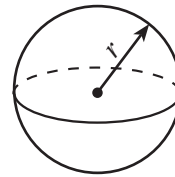
### Formula List

**Volume of prism** = area of cross-section  $\times$  length



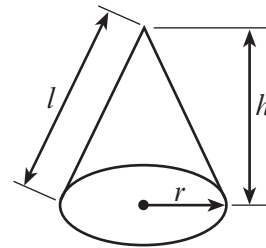
**Volume of sphere** =  $\frac{4}{3} \pi r^3$

**Surface area of sphere** =  $4\pi r^2$



**Volume of cone** =  $\frac{1}{3} \pi r^2 h$

**Curved surface area of cone** =  $\pi r l$

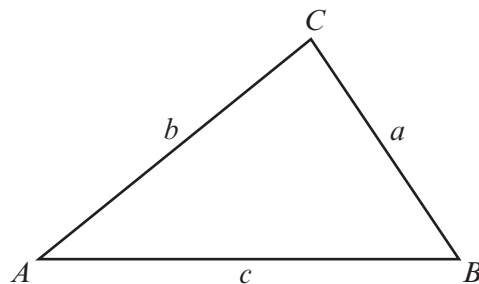


**In any triangle ABC**

**Sine rule**  $\frac{a}{\sin A} = \frac{b}{\sin B} = \frac{c}{\sin C}$

**Cosine rule**  $a^2 = b^2 + c^2 - 2bc \cos A$

**Area of triangle** =  $\frac{1}{2} ab \sin C$



### The Quadratic Equation

The solutions of  $ax^2 + bx + c = 0$

where  $a \neq 0$  are given by

$$x = \frac{-b \pm \sqrt{b^2 - 4ac}}{2a}$$

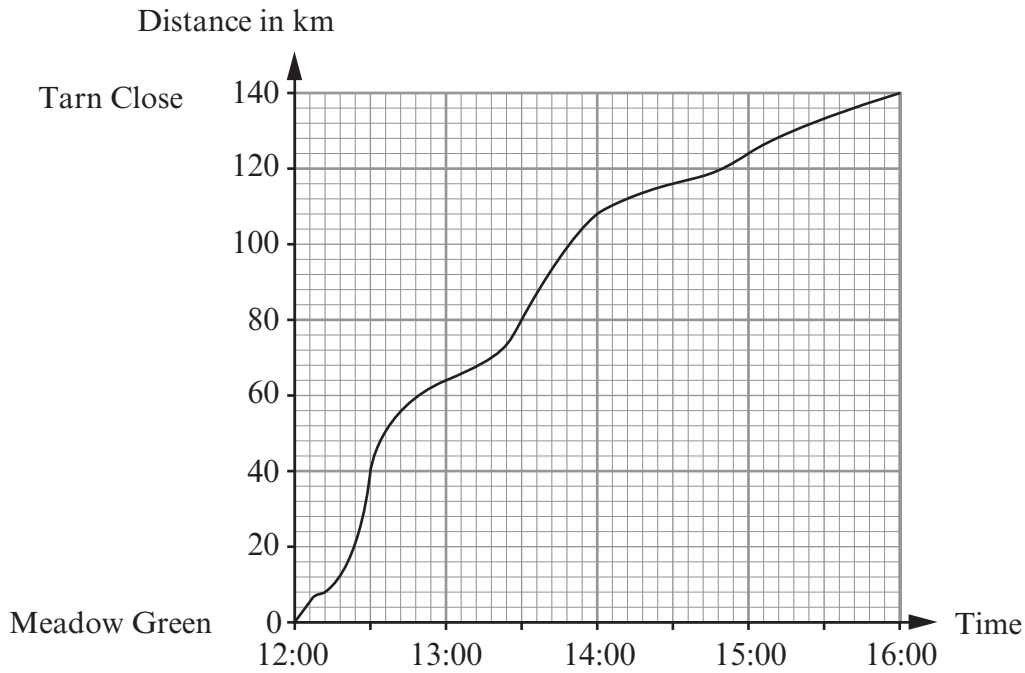
### Standard Deviation

Standard deviation for a set of numbers

$x_1, x_2, \dots, x_n$ , having a mean of  $\bar{x}$  is given by

$$s = \sqrt{\frac{\sum (x - \bar{x})^2}{n}} \quad \text{or} \quad s = \sqrt{\frac{\sum x^2}{n} - \left\{ \frac{\sum x}{n} \right\}^2}$$

1. The distance-time graph shows a 140 km journey from Meadow Green to Tarn Close.



(a) (i) What is the distance travelled between 13:00 and 14:30?

.....

.....

.....

.....

(ii) Find the average speed for this part of the journey.

.....

.....

.....

.....

[4]

(b) Explain how you can tell from the graph that it took less time to travel the first 70 km of the journey than it took to travel the final 70 km of the journey.

.....

.....

.....

.....

[1]

2. (a) The  $n$ th term of a sequence is  $n^2 - 6$ .  
Write down the first three terms of the sequence.

.....  
.....  
.....  
..... [2]

- (b) Factorise  $x^2 - 5x$ .

.....  
..... [1]

- (c) Factorise  $240y - 360$ .

.....  
..... [2]

- (d) Solve  $4(3x - 11) = 40$ .

.....  
.....  
.....  
..... [3]

- (e) Solve  $\frac{45}{x} = 5$ .

.....  
..... [1]

3. (a) Find  $\frac{14.5 \times 33.4}{710.7 - 35.9}$  correct to two decimal places.

.....  
.....  
.....  
..... [2]



4. The exchange rate for buying Canadian dollars (\$) at an exchange bureau is \$1.64 for £1. Carys only has £700 to exchange into Canadian dollars. The lowest Canadian dollar notes the exchange bureau has are \$50 notes.

How many Canadian dollars can Carys buy and how much will this cost her?  
You must give the units of your answer.

.....

.....

.....

.....

.....

.....

.....

.....

.....

.....

.....

[6]

**BLANK PAGE**

5. (a) The lengths of 100 fish were recorded.  
The results are summarised in the table below.

Length, $l$ cm	Frequency
$0 < l \leq 8$	15
$8 < l \leq 16$	67
$16 < l \leq 24$	18

Find an estimate for the mean length of these fish.

.....

.....

.....

.....

.....

.....

.....

.....

.....

.....

.....

[4]

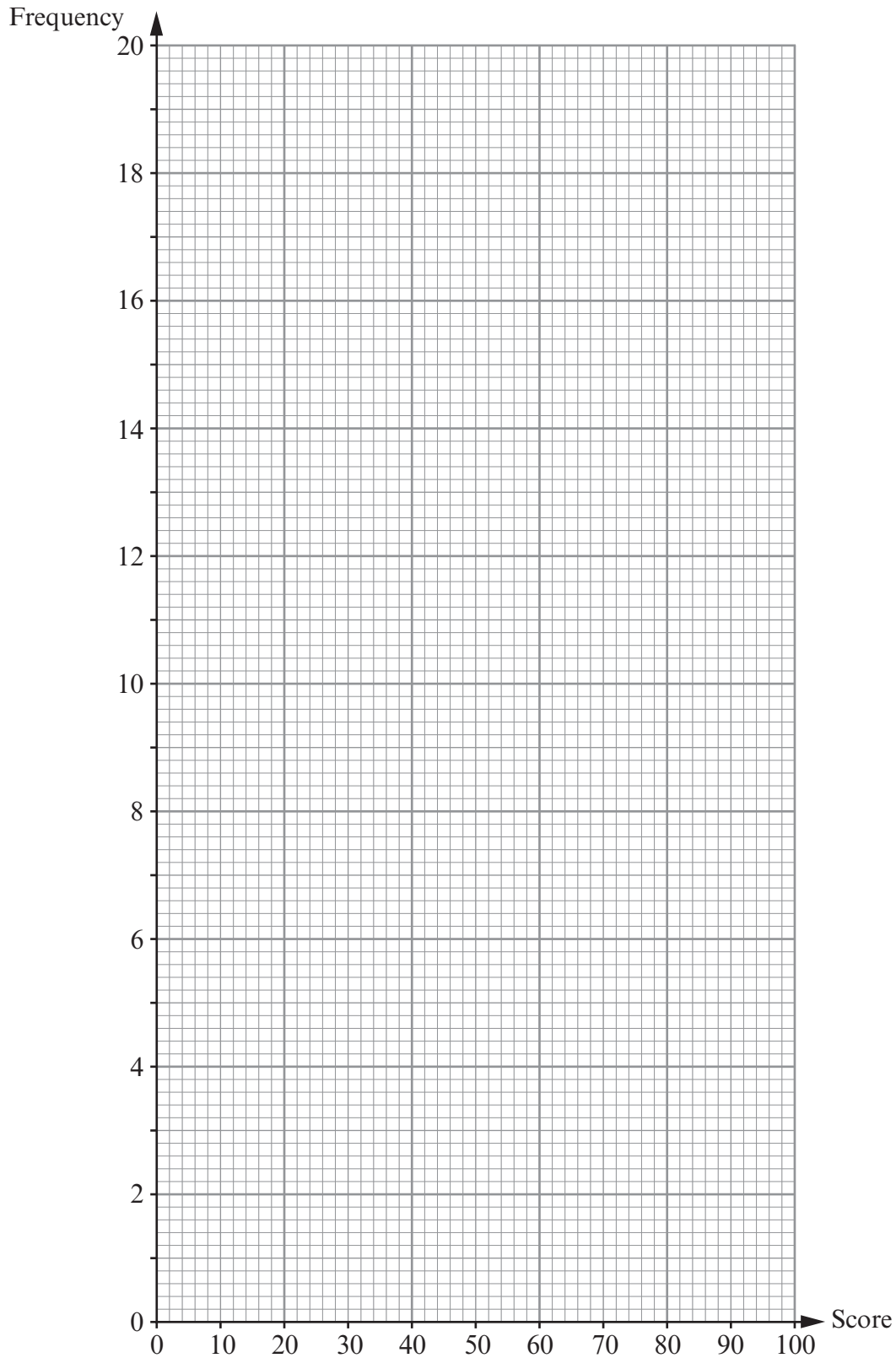


- (b) The points scored by 40 fishermen in a competition were recorded. The table shows a grouped frequency distribution of the results.

Score	1 to 20	21 to 40	41 to 60	61 to 80	81 to 100
Frequency	4	16	12	6	2

On the graph paper below, draw a frequency polygon to show the data.

[2]



6. (a) Calculate the circumference of a circle with a radius of  $7.2\text{ cm}$ , giving your answer to an appropriate degree of accuracy.

.....

.....

.....

.....

.....

.....

[3]

- (b) Calculate the area of a semicircle with a diameter of  $44.8\text{ cm}$ .

.....

.....

.....

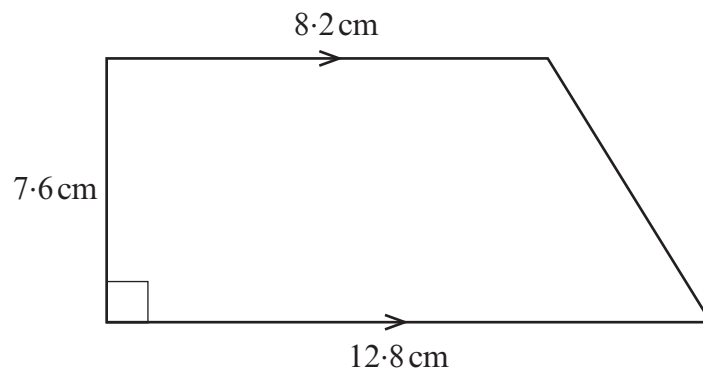
.....

.....

.....

[3]

- (c)



*Diagram not drawn to scale*

Calculate the area of the trapezium.

.....

.....

.....

.....

.....

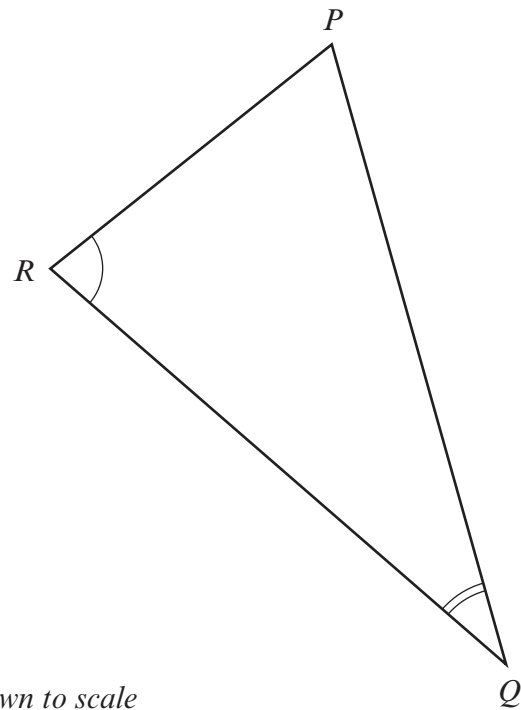
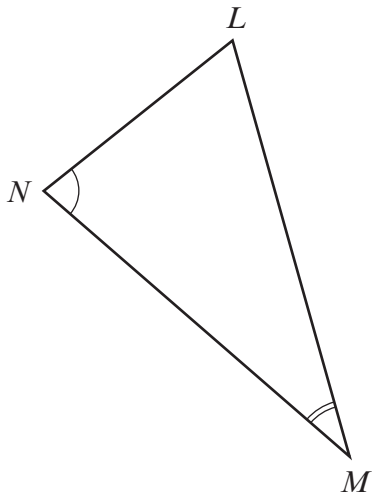
.....

[2]





9. Triangles  $LMN$  and  $PQR$  are similar.



*Diagrams not drawn to scale*

$LM = 3$  cm,  $MN = 2.5$  cm,  $PR = 3.6$  cm and  $PQ = 5.4$  cm.  
Showing all your working, find the length of

- (a)  $RQ$ ,

.....

.....

.....

.....

.....

.....

[2]

- (b)  $LN$ .

.....

.....

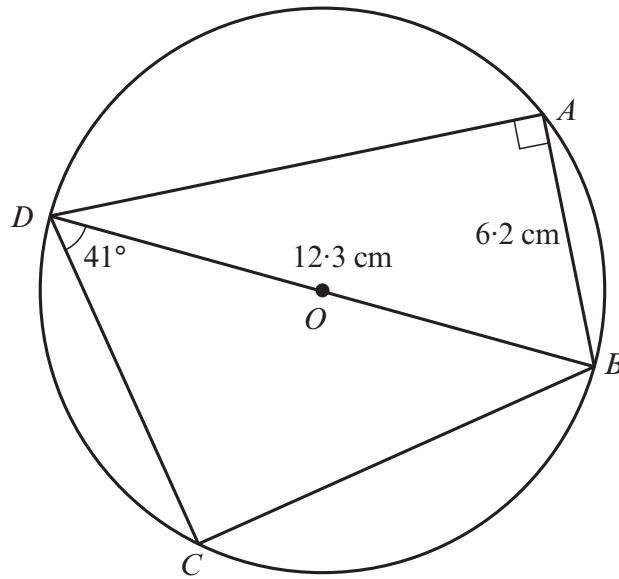
.....

.....

.....

[2]

10. The points  $A$ ,  $B$ ,  $C$  and  $D$  all lie on the circumference of a circle with centre  $O$ .



*Diagram not drawn to scale*

Given that  $BD = 12.3$  cm,  $AB = 6.2$  cm,  $\widehat{BDC} = 41^\circ$  and  $\widehat{DAB} = 90^\circ$ , calculate

- (a) the length  $AD$ ,

.....

.....

.....

.....

.....

.....

[3]

(b) the area of triangle  $BCD$ .

.....

.....

.....

.....

.....

.....

.....

.....

.....

.....

.....

.....

.....

.....

.....

.....

.....

.....

.....

.....

.....

.....

.....

[8]

11. There are 100 pupils in year 8.  
The time taken by each pupil to answer a question was recorded.  
The following grouped frequency distribution was obtained.

Time, $t$ seconds	$0 < t \leq 10$	$10 < t \leq 20$	$20 < t \leq 30$	$30 < t \leq 40$	$40 < t \leq 60$
Number of pupils	10	16	24	42	8

- (a) Find an estimate for the median of this distribution.

.....  
 .....  
 [1]

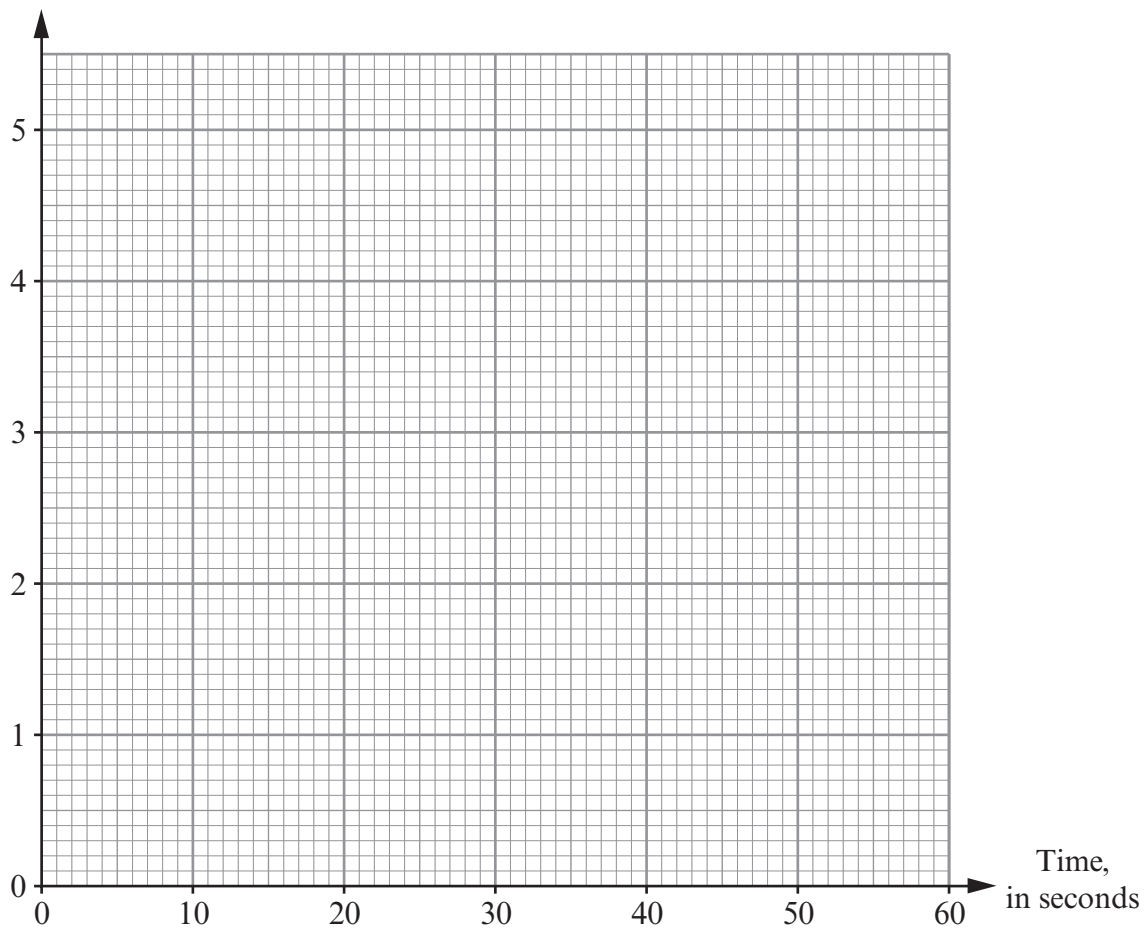
- (b) Draw a histogram to illustrate the distribution on the graph paper opposite.

.....  
 .....  
 .....  
 .....  
 [2]



Time taken to answer in seconds

Frequency density



12. Given that  $y$  is proportional to  $x^2$ , and that  $y = 4$  when  $x = 0.5$ ,

(a) find an expression for  $y$  in terms of  $x$ ,

.....

.....

.....

.....

.....

[3]

(b) use the expression you found in (a) to complete the following table.

$x$	0.5	3	
$y$	4		6400

.....

.....

.....

[2]



14. (a) The marks scored by 10 pupils in a test were as follows:

48      26      82      34      56      86      56      24      72      63

Calculate the mean and standard deviation of the 10 test marks.

.....

.....

.....

.....

.....

.....

.....

.....

.....

.....

.....

.....

.....

.....

.....

.....

.....

.....

.....

.....

.....

.....

.....

[3]

(b) Marks are added for the standard of presentation of work.  
In this case, two marks were added to each pupil's test mark.  
State the new mean and standard deviation for the test results.  
Give a reason for your answer.

.....

.....

.....

.....

.....

.....

.....

.....

.....

.....

.....

.....

.....

.....

.....

.....

.....

.....

.....

.....

.....

.....

[3]

